



# WEDNESDAY

## Geometry

1 What is the name of this shape?



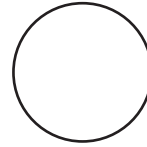
2 How many right angles does a square have?



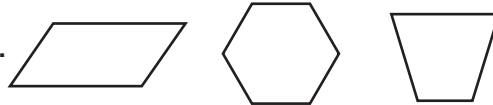
3 What is the name of this 3D shape?



4 Draw a line of symmetry.



5 Circle the hexagon.



# THURSDAY

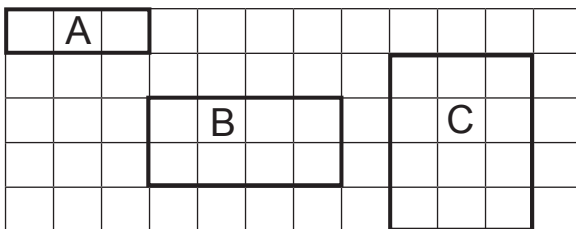
## Measurement

1 The time is 4:15. What time will it be in 30 minutes? Use a clock model to help you.

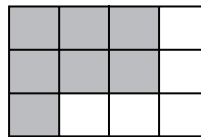
\_\_\_\_ : \_\_\_\_

3 Which shape has the greatest area?

A. \_\_\_\_ B. \_\_\_\_ C. \_\_\_\_



2 Find the perimeter and the area of the shaded shape.



The perimeter is \_\_\_\_ units.

The area is \_\_\_\_ square units.

4 How many days in a week?

A. 5 days B. 6 days C. 7 days

Here are the results of a survey on favourite colours.  
Complete the chart and answer the questions about the results.

Colour	Tally	Number
Red		
Blue		
Green		
Purple		

- 1 What was the most popular colour? \_\_\_\_\_
- 2 What was the least popular colour? \_\_\_\_\_
- 3 How many people liked either green or purple? \_\_\_\_\_
- 4 How many people were surveyed? \_\_\_\_\_
- 5 Which colours did the same number of people like most? \_\_\_\_\_

**BRAIN STRETCH**

Jane has 24 red beads and 52 blue beads.  
How many beads does she have altogether?