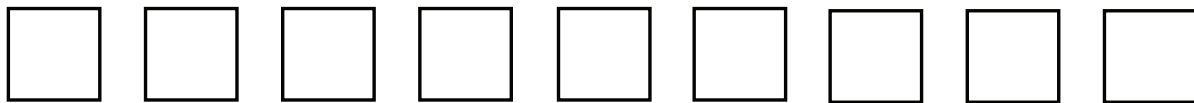


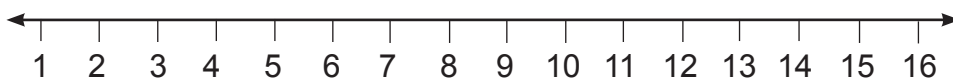
MONDAY

Patterning and Algebra

1. Colour the shapes to make a pattern. Circle the core of the pattern.



What is your pattern rule? _____



2. What is the missing number?

$$\underline{\quad} + 8 = 12$$

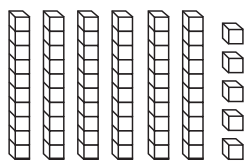
3. Count on by 2s from 20.

$$20, \underline{\quad}, \underline{\quad}, \underline{\quad}$$

TUESDAY

Number Sense and Operations

1. What is the number?




tens _____

ones _____

number _____

2. Write the numeral.

sixteen _____



3. Double the number then add one.

$$5 + 5 = \underline{\quad}$$

$$\text{so } 5 + 6 = \underline{\quad}$$

4. What is the name of this coin?



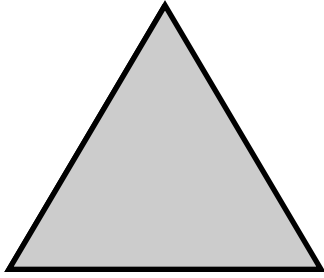
A. nickel

B. quarter

C. dime

WEDNESDAY

Geometry



1. Circle the name of this shape.

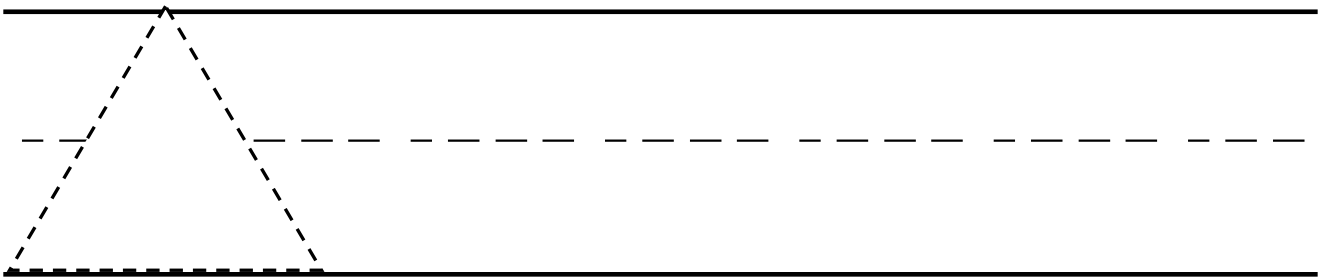
rectangle

triangle

2. How many sides does it have? _____

3. How many vertices does it have? _____


Trace and draw the shape.



THURSDAY

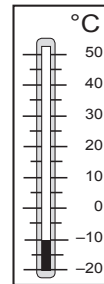
Measurement

1. What time is it?



_____ : _____

2. Is the temperature hot or cold?

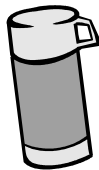


3. Which container holds more?

A.



B.





4. Measure the length of the line.





It is about _____  long.

Mr. Tate's students conducted a survey of their favourite pets. Use the pictograph to answer the questions about the results.

Favourite Pets



1. How many students chose  ? _____

2. How many students chose  ? _____

3. Circle the pet students chose the most.



4. Circle the pet students chose the least.



BRAIN STRETCH



The clown had 5 red balloons and 4 blue balloons. How many balloons did the clown have in all?