


# MONDAY Patterning and Algebra



1. Draw the next shape in the pattern.  
Colour the shapes to make another pattern.



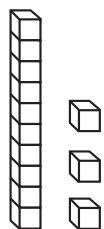
2. There were 3 bugs.  
2 more bugs came.  
How many bugs are there now?



3 plus 2 \_\_\_\_\_ in all

# TUESDAY Number Sense and Operations

1. How many tens and ones?



tens \_\_\_\_\_

ones \_\_\_\_\_

2. Write the numeral.

four \_\_\_\_\_


3. How many?



4. Circle the set that has more.



# WEDNESDAY Geometry



1. Circle the name of this shape.

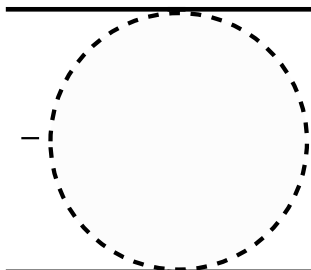
circle

triangle

2. How many sides does it have? \_\_\_\_\_


3. How many vertices does it have? \_\_\_\_\_

4. Trace and then draw the shape.



# THURSDAY Measurement

1. What time is it?




\_\_\_\_\_ o'clock

2. Circle the container that holds more.



3. Which flower is the biggest?

A.









B.



C.



### Favourite Pets

1. How many?



\_\_\_\_\_



\_\_\_\_\_



\_\_\_\_\_

2. Circle the most popular pet.




3. Circle the least popular pet.



## BRAIN STRETCH



1.



\_\_\_\_\_ + \_\_\_\_\_ = \_\_\_\_\_

2.



\_\_\_\_\_ - \_\_\_\_\_ = \_\_\_\_\_