

MONDAY

Patterning and Algebra

- 1** What is the next number if the pattern rule is subtract 6?

30, _____

- 2** Which number sentence has the same difference as $5 - 2$?

A. $4 - 2$ B. $8 - 6$ C. $6 - 3$

- 3** Barry wants to set 6 chairs around each of 4 tables. How many chairs will he need? Draw an array to find the product.

$$6 \times 4 = \underline{\quad}$$

- 4** Extend the pattern.

11, 22, 33, _____, _____

TUESDAY

Number Sense and Operations

1

$$\begin{array}{r} 168 \\ + 234 \\ \hline \end{array}$$

- 2** Write the following numbers in expanded form.

A. 398 _____

B. 651 _____

- 3** What is the value of the underlined digit?

A. 901 _____

B. 562 _____

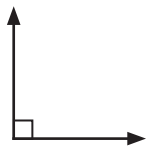
- 4** Compare the numbers using $<$, $>$, or $=$.

345 585

WEDNESDAY

Geometry

1 Describe the angle.



- A. right angle
- B. greater than a right angle
- C. less than a right angle

2 What is the name of this 3D shape?



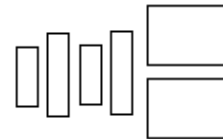
3 How many lines of symmetry?



4 How many sides does a triangle have?

5 What 3D shape could be made from these pieces?

- A. cylinder B. rectangular prism C. pyramid



THURSDAY

Measurement

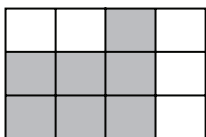
1 What is the symbol for the word metre?

- A. cm B. m C. km

2 How many minutes in 1 hour?

- A. 30 mins B. 60 mins C. 100 mins

3 Find the perimeter and the area of the shaded shape.



The perimeter is _____ units.




The area is _____ square units.


4 What is the best unit of measure for the length of an ant?


- A. metres
- B. centimetres
- C. millimetres

Here are the results of a survey on favourite drinks.
Use the pictograph to answer the questions about the results.

Favourite Drinks

Lemonade	
Milk	
Orange Juice	



Key:  = 2 people

- How many people were surveyed? _____
- Which drink did the fewest people choose? _____
- Which two drinks were chosen by the same number of people?

- How many more people chose milk than chose orange juice? _____

BRAIN STRETCH



1 56
+ 26

2 85
- 19

3 27
+ 64

4 54
- 19