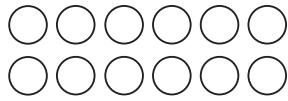


MONDAY

Patterning and Algebra

- 1** Use the array to find the product.

$$6 \times 2 = \underline{\quad\quad}$$



- 3** What is the missing number?

$$7 + \underline{\quad\quad} = 14$$

- 4** What is the next number if the pattern rule is add 7?

14,

- 2** Draw 3 groups of 4 crayons.

How many crayons are there?

Write the sentence for 3 groups of 4.

$$\underline{\quad\quad} \times \underline{\quad\quad} = 12$$

- 5** Extend the pattern.

10, 20, 30, , ,

What is the pattern rule?

TUESDAY

Number Sense and Operations

1

$$\begin{array}{r} 472 \\ + 358 \\ \hline \end{array}$$

- 2** Circle the greatest number.

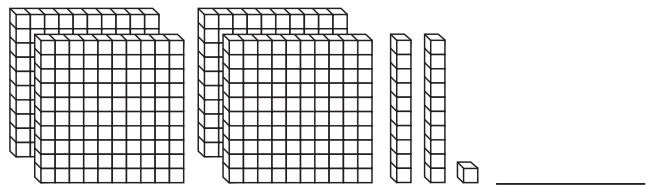
47 32 11

- 3** Round the following numbers to the nearest 10.

A. 67

B. 25

- 4** What is the number?



- 5** What is the value of the coins?



WEDNESDAY

Geometry

1 What is the name of this shape?



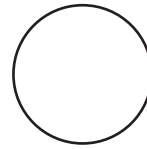
2 How many right angles does a square have?



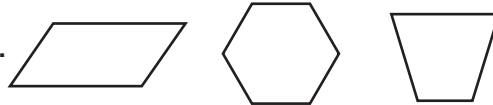
3 What is the name of this 3D shape?



4 Draw a line of symmetry.



5 Circle the hexagon.



THURSDAY

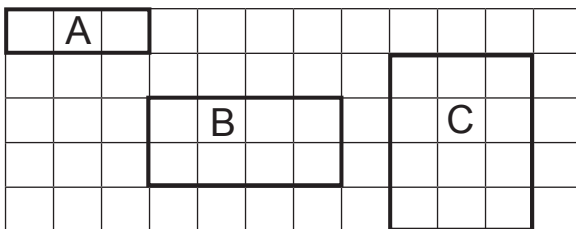
Measurement

1 The time is 4:15. What time will it be in 30 minutes? Use a clock model to help you.

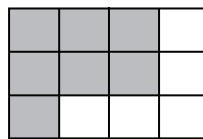
____ : ____

3 Which shape has the greatest area?

A. ____ B. ____ C. ____



2 Find the perimeter and the area of the shaded shape.



The perimeter is ____ units.

The area is ____ square units.

4 How many days in a week?

A. 5 days B. 6 days C. 7 days

Here are the results of a survey on favourite colours.
Complete the chart and answer the questions about the results.

Colour	Tally	Number
Red		
Blue		
Green		
Purple		

- 1 What was the most popular colour? _____
- 2 What was the least popular colour? _____
- 3 How many people liked either green or purple? _____
- 4 How many people were surveyed? _____
- 5 Which colours did the same number of people like most? _____

BRAIN STRETCH

Jane has 24 red beads and 52 blue beads.
How many beads does she have altogether?