

# WEDNESDAY

## Fractions


- 1** Write the improper fraction as a mixed number.

$$\frac{17}{12}$$

- 2** Subtract.

$$15\frac{1}{2} - 4 =$$

- 3** Each square in the grid has sides that measure  $\frac{1}{3}$  m. What is the area of the rectangle in meters?




- 4** Megan went to the store with \$5. She spent  $\frac{1}{5}$  of her money on a fruit smoothie. How much did Megan spend on the smoothie?


# THURSDAY

## Geometry

What are the coordinates of these places?


 Bakery \_\_\_\_\_

 Bank \_\_\_\_\_

 Flower shop \_\_\_\_\_

 Gas station \_\_\_\_\_

 Pet store \_\_\_\_\_

 Restaurant \_\_\_\_\_

In the City

