

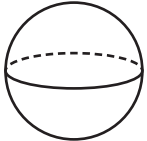
WEDNESDAY

Geometry

1 Draw a quadrilateral that is not a rectangle.

2 How many vertices does a triangle have?

3 How many vertices?



4 Does this shape have a line of symmetry?



A. yes

B. no

5 Describe the following pair of lines.




A. parallel B. intersecting C. perpendicular



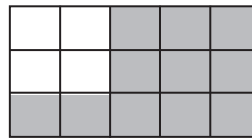
THURSDAY

Measurement

1 What will the time be 30 minutes from now?



2 Find the perimeter and the area of the shaded shape.



The perimeter is _____ units.

The area is _____ square units.

3 Which measuring tool would you use to find a date?

A. calendar

B. ruler

C. scale

4 Order the temperatures from lowest to highest.

33°C, 12°C, -3°C

_____, _____, _____