






1. Complete the tally chart.

Favorite Fish


	Number	Tally
	6	
	4	
	5	



2. Circle the most popular fish.





3. Circle the least popular fish.



BRAIN STRETCH



There are 4  on the iceberg. Then 1  leaves.

How many  are there now?

$$\underline{\quad\quad} \quad \boxed{\quad\quad} \quad \underline{\quad\quad} = \underline{\quad\quad}$$