

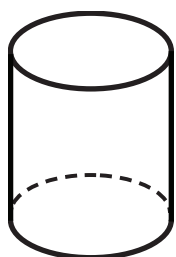
WEDNESDAY

Geometry

1. Color the shapes that are the same size and shape.




2. What is the name of this 3D shape?



A. cylinder

B. pyramid

3. What shape is inside the circle?



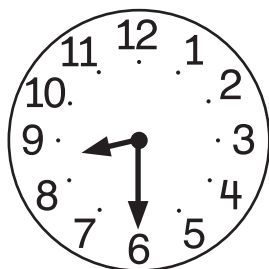
A. triangle

B. square

THURSDAY


Measurement

1. What time is it?



half past _____

2. Circle the best measurement tool for the temperature.



A.



B.



3. Measure the length of the line.



It is about _____ paper clips long.

