



# MONDAY

## Patterning and Algebra

1. Draw the next shape in the pattern.  
Color the shapes to make another pattern.



2. Lisa has 1 orange  
and Pat has 8 oranges.  
How many oranges  
are there in all?



1

plus

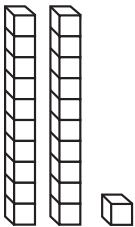
8

\_\_\_\_\_ in all

# TUESDAY

## Number Sense and Operations

1. How many tens and ones?



tens \_\_\_\_\_

ones \_\_\_\_\_

2. What is the value of a quarter?



\_\_\_\_\_ ¢

3. What is the number after 3?

2, 3, \_\_\_\_\_

4. Circle the set that has fewer.

